

Compétence : Trouver le complément à la dizaine supérieure.

Prénom .....

Date .....

## 1 Complète les égalités.




$$4 + \dots = 10$$



$$14 + \dots = 20$$



$$24 + \dots = 30$$



$$34 + \dots = 40$$




$$5 + \dots = 10$$



$$15 + \dots = 20$$



$$25 + \dots = 30$$



$$35 + \dots = 40$$




$$8 + \dots = 10$$



$$18 + \dots = 20$$

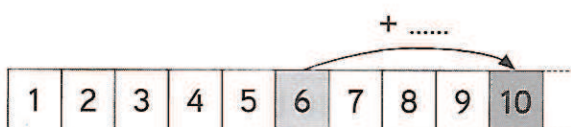


$$28 + \dots = 30$$

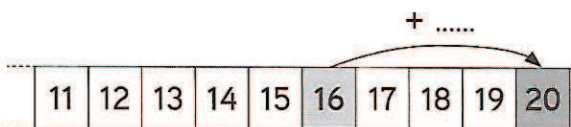


$$38 + \dots = 40$$


## 2 Complète.




$$6 + \dots = 10$$



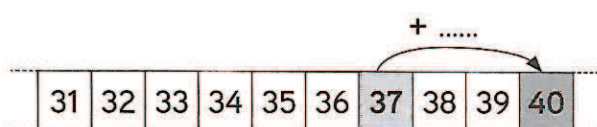
$$16 + \dots = 20$$



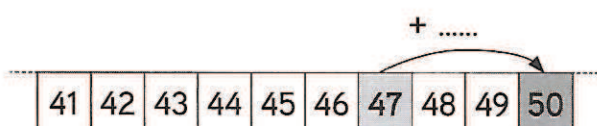
$$26 + \dots = 30$$



$$7 + \dots = 10$$



$$37 + \dots = 40$$



$$47 + \dots = 50$$